













Name: _____











Date: _____




MATH RIDDLES

Find out how much each picture is worth by solving the puzzles. Use the numbers to figure out the value of the berries, leaves, mushrooms, and more. Once you know their values, solve the final question in each section. Have fun!

 +  = 20
 -  = 5
 +  = 35
 -  +  = _____

-  =
-  =
-  =

 +  = 28
 +  +  = 34
 +  +  = 40
 +  = _____


-  =
-  =
-  =

Name: _____

Date: _____




MATH RIDDLES

Find out how much each picture is worth by solving the puzzles. Use the numbers to figure out the value of the berries, leaves, mushrooms, and more. Once you know their values, solve the final question in each section. Have fun!

 =



 =

 =

 +  +  = 18

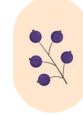
 +  +  = 22

 +  +  = 26

 +  = _____

 =


 =

 =

 +  = 36

 -  = 8

 +  = 22

 +  -  = _____